


LESSON
6-1

Practice B


Percents

Write the percent modeled by each grid.

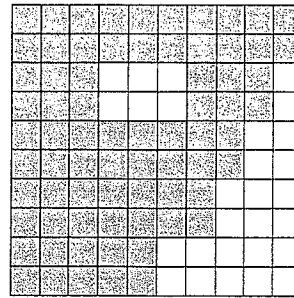
1.



2.



3.



Write each percent as a fraction in simplest form.

4. 16%

5. 49%

6. 20%

7. 15%

8. 18%

9. 60%

10. 35%

11. 46%

12. 86%

13. 79%

14. 56%

15. 45%

Write each percent as a decimal.

16. 33%

17. 57%

18. 46%

19. 6%

20. 4.7%

21. 13.2%

22. 75.8%

23. 4%

24. 1.16%

25. 27.05%

26. 93.01%

27. 7.9%