

LESSON
1.6

Name _____




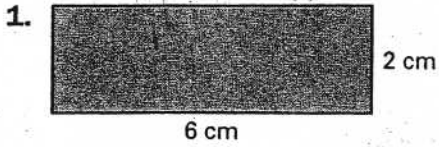
Date _____

Practice B

For use with pages 31-35

Lesson 1.6

Match the figure with its area or perimeter.



- A. 12 centimeters
- B. 12 square centimeters
- C. 36 centimeters
- D. 36 square centimeters

Find the perimeter and the area of the rectangle or square with the given dimensions.

- 5. $l = 11$ inches, $w = 5$ inches
- 6. $s = 4$ meters
- 7. $s = 10$ millimeters
- 8. $l = 13$ feet, $w = 2$ feet
- 9. $l = 8$ centimeters, $w = 7$ centimeters
- 10. $s = 7$ inches
- 11. $s = 3$ meters
- 12. $l = 12$ yards, $w = 6$ yards

13. Which two rectangles with the given length and width have the same area?

