

LESSON
11.5

Name _____ Date _____

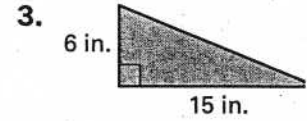
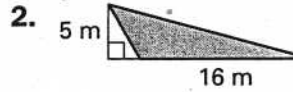
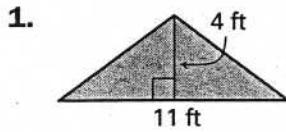
Practice B

For use with pages 556-562



Lesson 11.5

Find the area of the triangle. Find the perimeter also.



Find the unknown base or height of the triangle.

4. $A = 56 \text{ km}^2, b = \underline{\quad?}, h = 8 \text{ km}$

5. $A = 25.5 \text{ mm}^2, b = 3 \text{ mm}, h = \underline{\quad?}$

6. $A = 42 \text{ mi}^2, b = 7 \text{ mi}, h = \underline{\quad?}$

7. $A = 88 \text{ ft}^2, b = \underline{\quad?}, h = 8 \text{ ft}$