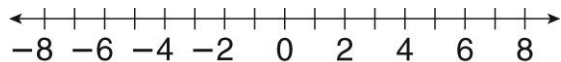


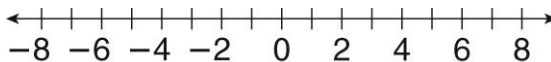
LESSON **Practice B**
2-1 *Integers*

Graph each integer and its opposite on a number line.

1. 8



2. -7



Compare the integers. Use < or >.

3. -15 ___ -7

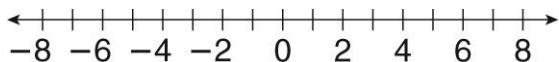
4. 8 ___ -8

5. -14 ___ 13

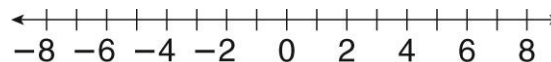
6. -18 ___ -20

Use a number line to order the integers from least to greatest.

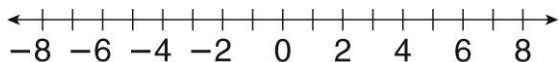
7. -1 ; 4 ; -5 ; 7 ; -3



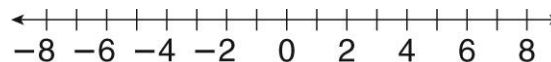
8. -6 ; 8 ; 0 ; 4 ; -2



9. 6 ; 5 ; -7 ; -8 ; -2



10. 1 ; 3 ; -4 ; -5 ; 7



Use a number line to find each absolute value.

11. $|-18|$ _____

12. $|11|$ _____

13. $|-25|$ _____

14. $|19|$ _____

15. $|-10|$ _____

16. $|16|$ _____

17. $|22|$ _____

18. $|-14|$ _____

19. $|9|$ _____

20. $|-24|$ _____

21. $|-7|$ _____

22. $|17|$ _____

23. Christy dove to a depth of 12 feet below the surface of the water. Write the depth as an integer.

24. The highest point in North Carolina is Mt. Mitchell, with a height of 6,684 feet. Write the height of Mt. Mitchell as an integer.
